



1.



2.



3.



4.



5.



Порчаҳо


1.



2.



3.



4.



5.



1.



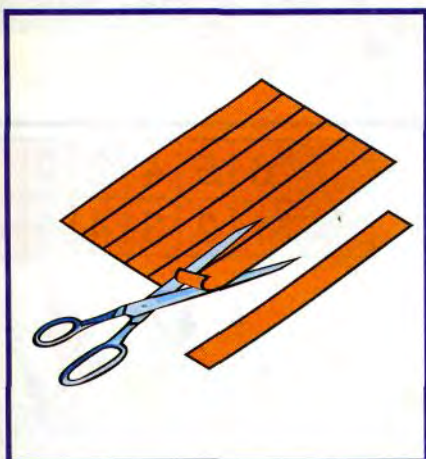
2.




3.



4.



5.



1.

1	2	3	4	5	6	7
---	---	---	---	---	---	---


7	6	5	4	3	2	1
---	---	---	---	---	---	---

2. 

6	+		=	7
---	---	--	---	---

3.

7	-	1	=	
---	---	---	---	--



4.

	●	●	●	●	●	●	●
	●	●	●	●	●	●	●
	●	●	●	●	●	●	●
	●	●	●	●	●	●	●

5.

7	6	5	4	3	2	1
	1	2	3	4	5	6



▲	▲	▲	▲	▲	▲	▲
7	7					

1.

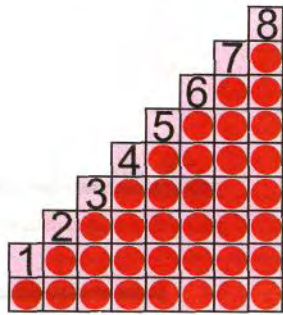


8

2.



3.



4.




8	
7	1



8	
6	2



8	
5	3




8	
4	4



1.

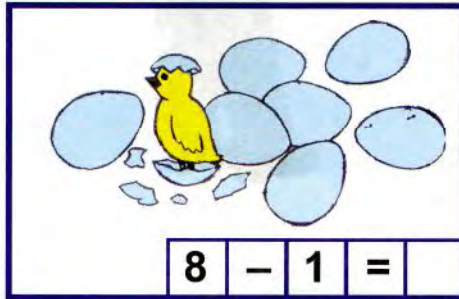


2.



7	+	1	=	
---	---	---	---	--

3.




8	-	1	=	
---	---	---	---	--

4.



5.

8	7	6	5	4	3
	1	2	3	4	5



1.



7	+	1	=	8
---	---	---	---	---

8	-	1	=	7
---	---	---	---	---

2.



3	+	2	=	
5	-	2	=	



4	+	1	=	
5	-	1	=	

3.




4	+	2	=	
6	-	2	=	



	+	2	=	5
5	-	2	=	

4.



7	+	1	=	
---	---	---	---	--

1	2																		
8	7																		





1.



9



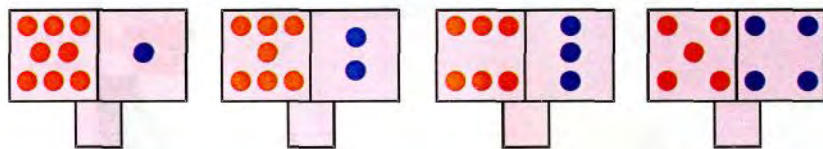
2.



			
$8 + 1 =$		$9 - 1 =$	

3.



4.



9	9	9	9	9	9	9	9	9	9
									

1.




$$8 + 1 = \square$$

2.




3.



4.

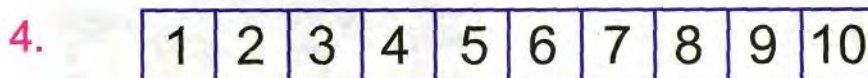
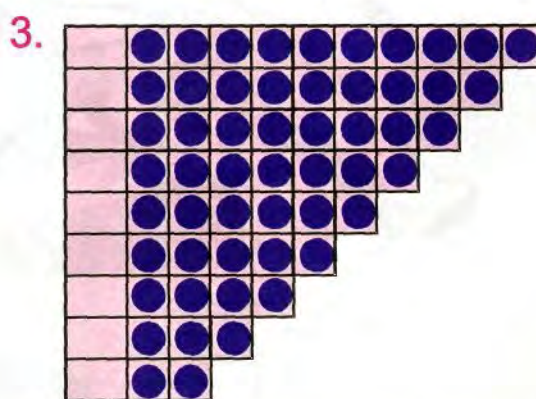


5.





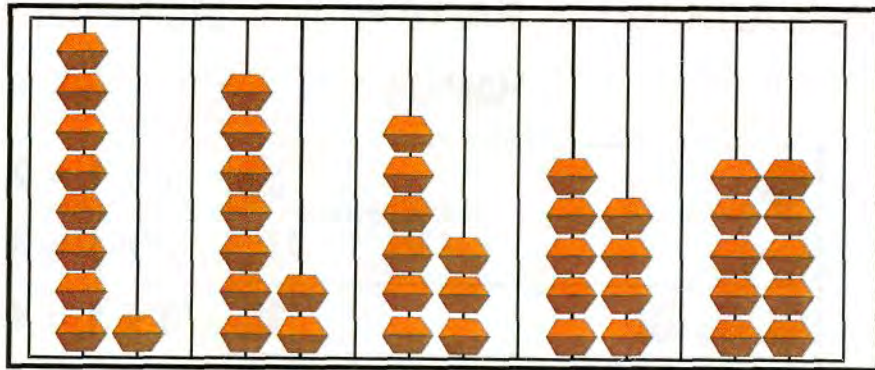
$$\boxed{9} + \boxed{} = \boxed{10}$$




$$\boxed{10} - \boxed{1} = \boxed{}$$



1.



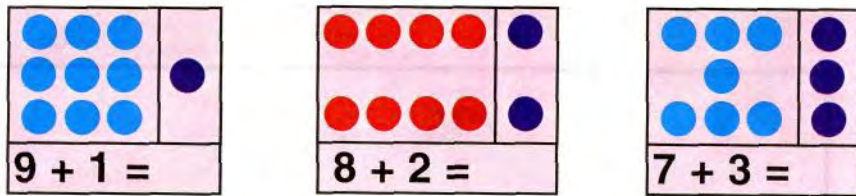
2.



3.

$6 - 1$ $7 + 1$ $4 + 1$ $3 + 1$
 $5 + 1$ $8 - 1$ $5 - 1$ $4 - 1$

4.



5.





















	1	1	1	0																
+																				
-																				
=																				



ЏАДВАЛИ ЏАМЪ ВА ТАРХ ДАР ДОИРАИ 10

Џамъи 1

1.

		$1 + 1 = 2$
		$2 + 1 = 3$
		$3 + 1 = 4$
		$4 + 1 = 5$
		$5 + 1 = 6$
		$6 + 1 = 7$
		$7 + 1 = 8$
		$8 + 1 = 9$
		$9 + 1 = 10$

2.

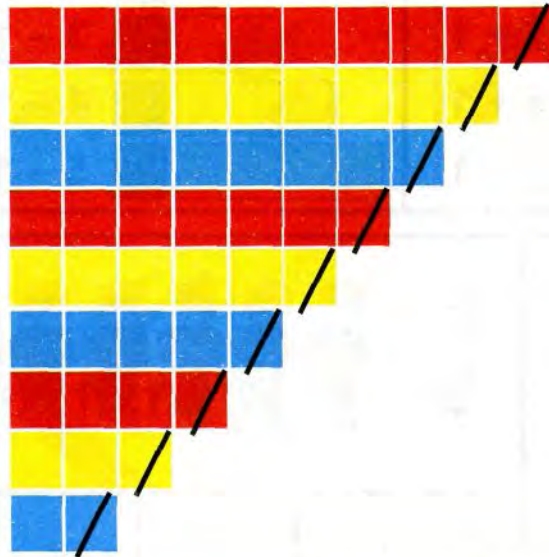
$2 + 1 = \square$

3.

$1 + 1$	$3 + 1$	$5 + 1$	$7 + 1$
$2 + 1$	$4 + 1$	$6 + 1$	$8 + 1$

Тарҳи 1

1.



$$10 - 1 = 9$$

$$9 - 1 = 8$$

$$8 - 1 = 7$$

$$7 - 1 = 6$$

$$6 - 1 = 5$$

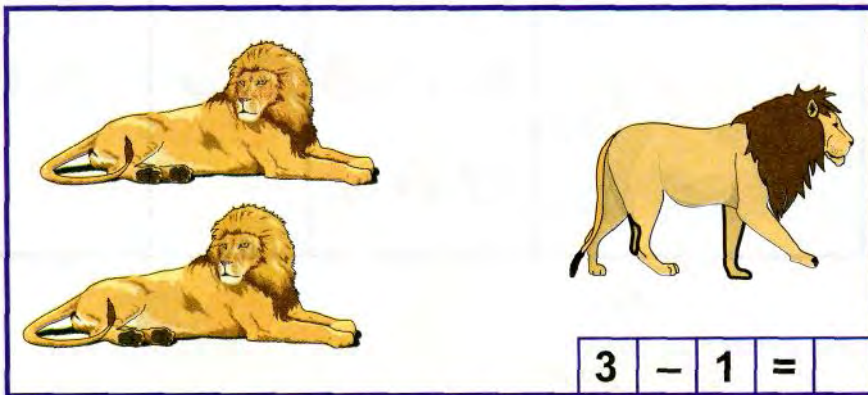
$$5 - 1 = 4$$

$$4 - 1 = 3$$

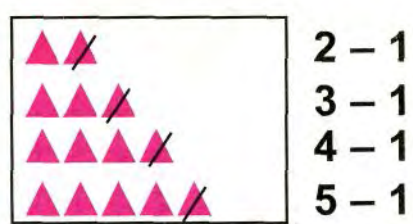

$$3 - 1 = 2$$

$$2 - 1 = 1$$









2.









3.



1.

	$1 + 1$		$2 - 1$
	$2 + 1$		$3 - 1$
	$3 + 1$		$4 - 1$
	$4 + 1$		$5 - 1$

2.

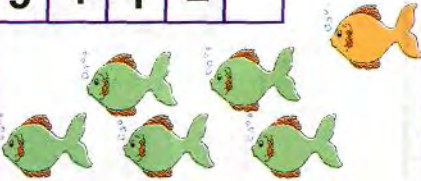

			
			

3.








$1 + 1 = 2$	$3 + 1$	$2 - 1$
$2 + 1 = 3$	$4 + 1$	$3 - 1$

1.

$5 + 1 =$		
		$6 - = 5$

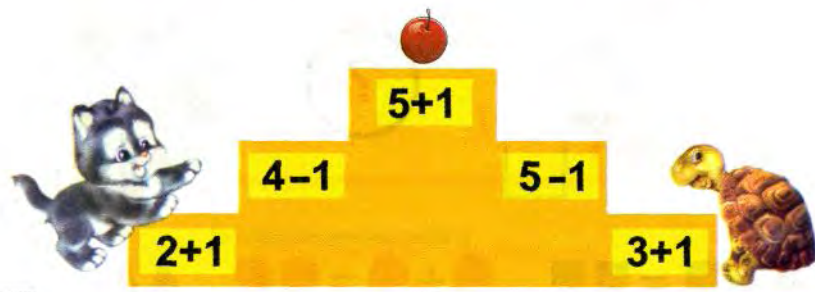
2.

3.

5 3 7 2 1 4 8 9 6 10

4.




2+1 4-1 5+1 5-1 3+1


5.

$7 + 1$	$8 + 1$	$9 + 1$	$10 - 1$
$8 - 1$	$10 - 1$	$9 - 1$	$6 + 1$

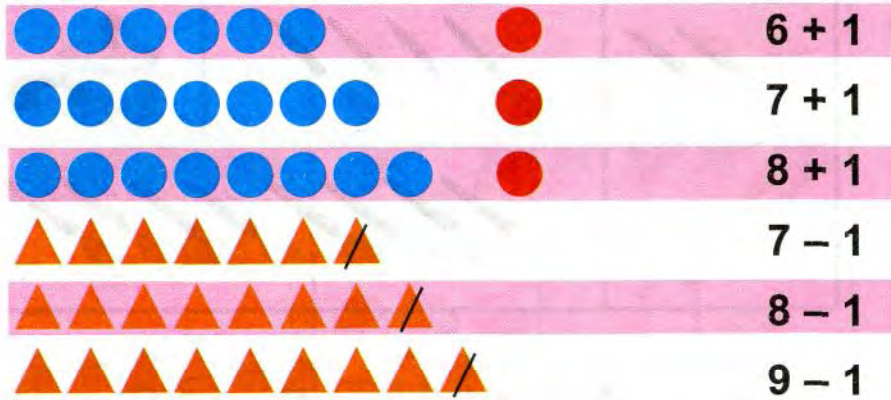
1.




2.



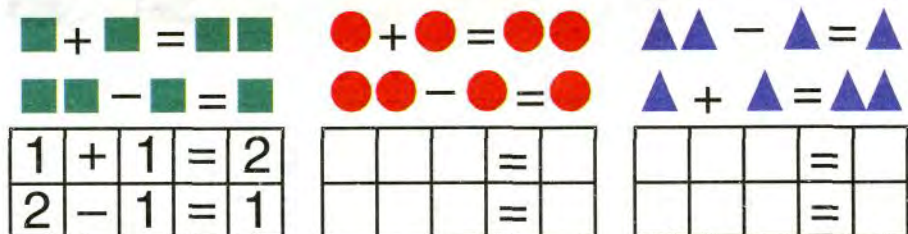
3.



4.

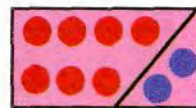




5.



1. $+ 1 + 1$

$- 1 - 1$



$1 + 1 + 1 =$

$3 + 1 + 1 =$

$5 + 1 + 1 =$

$7 + 1 + 1 =$



$4 - 1 - 1 =$



$6 - 1 - 1 =$



$5 - 1 - 1 =$



$7 - 1 - 1 =$

3.



4.

$4 - 1 =$

$7 - 1 = 6$



$2 + 1 =$	$3 + 1 + 1 =$	$4 + 1 + 1 =$
$2 - 1 =$	$3 - 1 - 1 =$	$6 - 1 - 1 =$

Чамъи 2

1.

$$4 + 2 = \square$$

$$7 - 2 = \square$$



2.

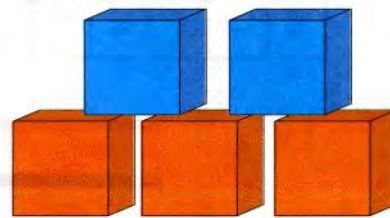
$1 + 2 = 3$	●	● ●
$2 + 2 = 4$	● ●	● ●
$3 + 2 = 5$	● ● ●	● ●
$4 + 2 = 6$	● ● ● ●	● ●
$5 + 2 = 7$	● ● ● ● ●	● ●
$6 + 2 = 8$	● ● ● ● ● ●	● ●
$7 + 2 = 9$	● ● ● ● ● ● ●	● ●
$8 + 2 = 10$	● ● ● ● ● ● ● ●	● ●

3.



$$2 + 2 = \square$$

4.











$$3 + 2 = \square$$

5.


$$5 + \square = 7$$

Тархи 2

1.


	$3 - 2 = 1$
	$4 - 2 = 2$
	$5 - 2 = 3$
	$6 - 2 = 4$
	$7 - 2 = 5$
	$8 - 2 = 6$
	$9 - 2 = 7$
	$10 - 2 = 8$

2.



$5 - 2$

$6 - 2$



$6 + 2$

$7 + 2$

3.

$7 - 1 - 1$

$4 + 2$

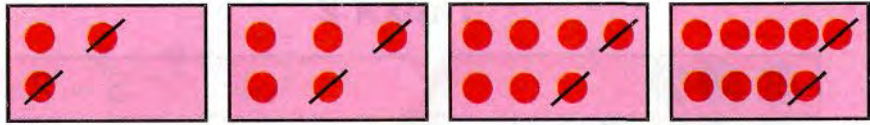
$2 - 1 - 1$

$7 + 1 + 1$

$8 + 1$

$2 + 1 + 1$

1.



$$3 - 2 =$$

$$1 + 2 =$$

$$5 - 2 =$$

$$3 + 2 =$$

$$7 - 2 =$$

$$5 + 2 =$$

$$9 - 2 =$$

$$7 + 2 =$$

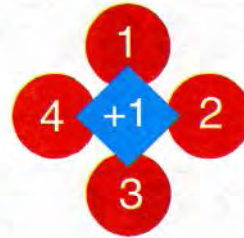
2.



5 + 3

3	+	2	=	
---	---	---	---	--

3.



4.

$8 + 1$

$10 + 1$

$9 - 1$

$8 + 1$

$3 + 2$

$6 - 2$

$5 - 2$

$6 + 2$

Зиёд кунед




3	+	1	=	
---	---	---	---	--




5	+	1	=	
---	---	---	---	--

4.



5.



Кам кунед

1.



$$4 - 1 = 3$$

2.



3.



4.

$$8 \quad 7 \quad 6 \quad 5 \quad 4 \quad 3 \quad 2 \quad 1$$


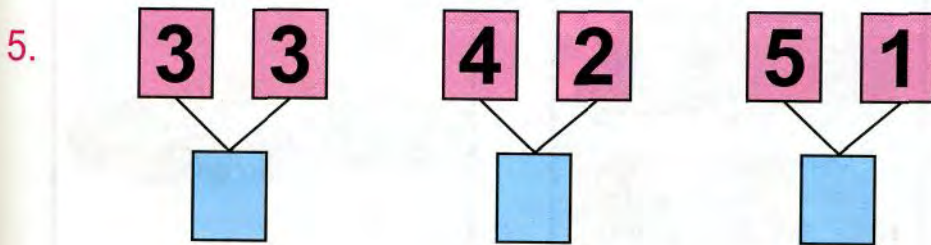
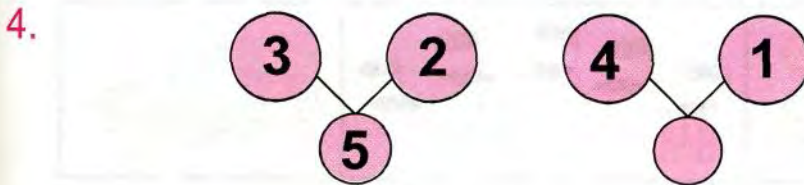
5.

$$\begin{array}{cccc} 8 - 1 & 6 - 1 & 4 - 1 & 2 - 1 \\ 7 - 1 & 5 - 1 & 3 - 1 & 1 - 1 \end{array}$$

6.

$$\begin{array}{cccc} 3 + 2 & 4 - 2 & 6 + 2 & 7 + 2 \\ 5 - 2 & 2 + 2 & 8 - 2 & 9 - 2 \end{array}$$

Сантиметр



Цуфт. Ток


1.



2.




3.



4.




5.



10	-		=	9
9	-		=	8
8	-		=	7
7	-		=	6

Масъала


1.



2.




3.



4.

$$\begin{array}{cccc} 2 - 2 & 3 + 2 & 7 + 2 & 4 - 2 \\ 4 - 0 & 5 - 2 & 9 - 2 & 2 + 2 \end{array}$$

1.



2.




3.

9 		8 		7 	
		5 	5 		

4. Таркиби ададҳои 3, 4, 5, 6, 7, 8, 9, 10-ро гӯед.


1.



2.



3.



2

4

6

4.

$$\begin{array}{ll} 2 - 1 & 4 - 1 \\ 3 - 1 & 5 - 1 \end{array}$$

2	+	2	=	
---	---	---	---	--

2	+	2	+	2	=	
---	---	---	---	---	---	--

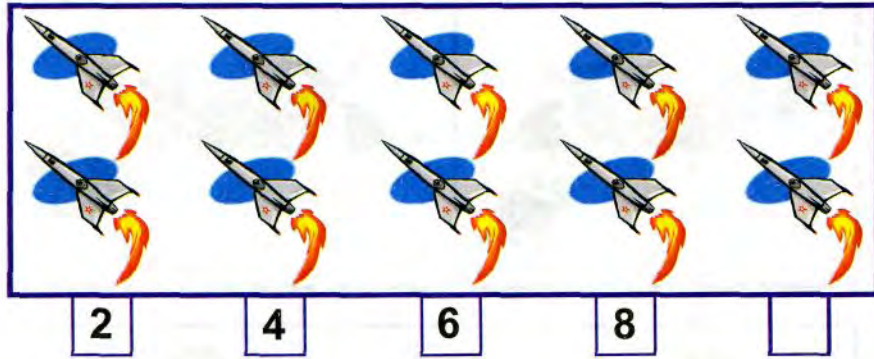
5.

$$\begin{array}{lll} 2 + 2 & 6 + 2 & 5 + 2 \\ 4 - 2 & 8 - 2 & 7 - 2 \end{array}$$

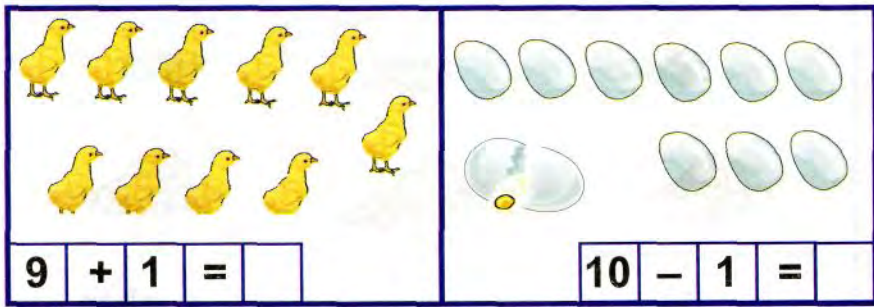
6.

2	2	2
2	2	2
2	2	2


1.



2.



3.




4.

$2 + 2$ $3 + 2$ $4 + 2$ $6 + 2$
 $2 - 2$ $5 - 2$ $6 - 2$ $8 - 2$


1. Ҷадвалҳои ҷамъи 1 ва 2-ро гӯед. Ҷадвалҳои тарҳи 1 ва 2-ро гӯед.
2. Таркиби ададҳои 6, 7, 8, 9-ро гӯед.
3. Ададҳоеро нишон диҳед, ки аз ададҳои 4, 6, 8 ду воҳид зиёд бошанд. Ададҳоеро нишон диҳед, ки аз ин ададҳо 2 воҳид кам бошанд.
4. Кадом ададҳо ҷамъ кунем, 7 ҳосил мешавад?
5. 5, 6, 7, 8, 9. Ин ададҳо 1 воҳид зиёд карда, дар дафтар нависед.
6. $1 + 1$ $5 + 1$ $2 - 1$ $6 - 1$ $3 + 1$ $7 + 1$
 $2 + 1$ $6 + 1$ $3 - 1$ $7 - 1$ $4 + 1$ $8 + 1$

7.



$3 + 2 =$	5
$5 - 2 =$	3
$5 + 2 =$	7
$7 - 2 =$	5















$1 + 2 =$	
$6 - 2 =$	
$6 + 2 =$	
$10 - 2 =$	



7 2 1 6 10
3 5 4 8 9




Чамъи 3

1.



		$1 + 3$
		$2 + 3$
		$3 + 3$
		$4 + 3$
		$5 + 3$
		$6 + 3$
		$7 + 3$

2. $3 = 1 + 1 + 1$    $3 = 2 + 1$

3.








		
$2 + 3 = 5$	$3 + 3 =$	$4 + 3 =$

4.




	
$1 + 3 =$	$- =$

Тархи 3


1.

	$4 - 3 = 1$
	$5 - 3 = 2$
	$6 - 3 = 3$
	$7 - 3 = 4$
	$8 - 3 = 5$
	$9 - 3 = 6$
	$10 - 3 = 7$


2.

		
$5 - 3 =$	$6 - 3 =$	$7 - 3 =$

3.


$1 + 1 + 1 + 1 = 4$

4.

	$4 - 1 - 1 - 1 = 1$
---	---------------------

$1 + 3 =$	$2 + 3 =$	$3 + 3 =$	$5 + 3 =$
$4 - 3 =$	$5 - 3 =$	$6 - 3 =$	$8 - 3 =$

ЇАМЪШАВАНДА. СУММА

1.

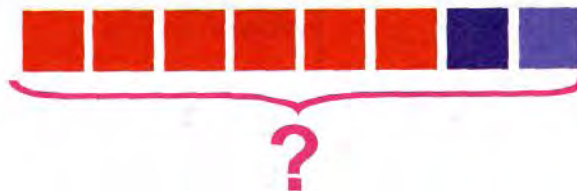


$$\boxed{3} + \boxed{2} = \boxed{}$$

3 - ҇амъшаванда (҇амъшавандаи якум)
2 - ҇амъшаванда (҇амъшавандаи дуум)
5 - сумма (ҳосили ҇амъ)

2. $4 + 4$ $3 + 4$ $5 + 4$ $4 + 0$
 $8 - 4$ $7 - 4$ $9 - 4$ $4 - 0$

3.






1.

8	4		6		2
		3		1	

9	8		6		7
		2		4	

2.



$$7 + 2 = \square$$

$$6 + 3 = \square$$

$$8 - 2 = \square$$

$$9 - 2 = \square$$

$$9 - 3 = \square$$

$$10 - 2 = \square$$

3. Ҳафта аз 7 рӯз иборат аст. Як рӯзаш рӯзи истироҳат аст. Дар як ҳафта чанд рӯзи корӣ ҳаст?

4. Дар як шохча 5-то олу буд.



Дар шохчаи дигар ҳамон қадар олу буд.



Дар ду шохча чандто олу буд?

5.

$$\begin{array}{l} 5 + 2 \\ 7 + 2 \end{array}$$

$$\begin{array}{l} 6 - 4 \\ 5 + 4 \end{array}$$

$$\begin{array}{l} 10 - 3 \\ 9 - 1 \end{array}$$

$$\begin{array}{l} 7 + 2 \\ 10 - 1 \end{array}$$

